

SRI KANCHI MAHASWAMI VIDYA MANDIR

WATER

CLASS : II

TASK : 1



Read the passage and answer the following questions

What would we do without water? Every living thing needs water. Earth is the only planet that has water on it, and it is the only planet which supports life on it.

Earth is mostly covered with water, over two – thirds of earth's surface is covered with water. Water fills oceans, seas, rivers, lakes and ponds. There is also a large amount of water that we don't see, which is underground water.

Most water form is in liquid form, but water can be found in solid ice form, in places where it is very cold. Water is also found in gas form, such as in clouds and fog. Foggy weather means that there is a lot of water in the air.

Without water, everything on earth would die. All plants and animals need water to live. People and animals usually get water from lakes and streams around them. However, some countries get water from salty oceans and seas. They must first remove salt to get drinkable water.

How do desert trees survive in places where there seems to be no water? Plants and trees get their water from ground with their roots. Their roots must dig deep to get water they need.

Water is the stuff of life!

Questions


- 1) Why is water so important?
- 2) How much of earth's surface is covered with water?
- 3) What are the three forms that water takes?
- 4) Where do people and animals get their water they need?
- 5) How do trees in the desert get water?

SRI KANCHI MAHASWAMI VIDYA MANDIR
WATER

CLASS : II

TASK : 2

Count the number of sea animals and write in the box




ஸ்ரீ காஞ்சி மஹாசுவாமி வித்யா மந்திர்
செயல்முறைத் திட்டம்
தலைப்பு: நீர்

வகுப்பு: 2

Task :3

கீழ்காணும் படத்தின் பெயர்களை வினாக்களுக்கு ஏற்ப எடுத்து எழுதுக.



1.நீரில் மட்டும் வாழும் உயிரினங்களின் பெயர் எழுதுக?

2.நீரிலும், நிலத்திலும் வாழும் உயிரினங்களின் பெயர்களை எழுதுக?

3.நீரில் வாழும் குதிரையின் பெயர் என்ன?

4.எட்டு கைகள் உடைய உயிரின் பெயர் என்ன?

5.அதிக ஆண்டுகள் வாழும் உயிரினத்தின் பெயர் என்ன?


SRI KANCHI MAHASWAMI VIDYA MANDIR
WATER

CLASS : II

TASK : 4

1. Connect the dots and colour the picture.

बंदोंको जोडकर चित्र मरंगभरण



SRI KANCHI MAHASWAMI VIDYA MANDIR WATER

CLASS : II

TASK : 5

Identify the source of water from the below picture

